





Use the array provided to solve each problem.


1)  $30 \times 31 =$




2)  $20 \times 23 =$




3)  $20 \times 27 =$




4)  $20 \times 28 =$



5)  $20 \times 22 =$



6)  $20 \times 29 =$



Answers

1. \_\_\_\_\_

2. \_\_\_\_\_

3. \_\_\_\_\_

4. \_\_\_\_\_

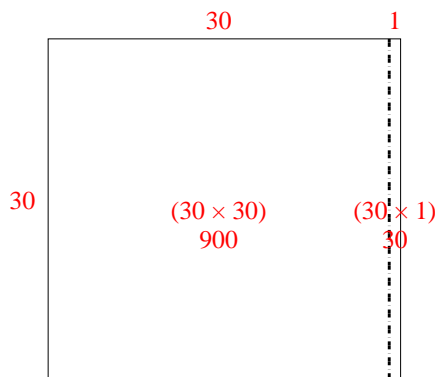
5. \_\_\_\_\_

6. \_\_\_\_\_

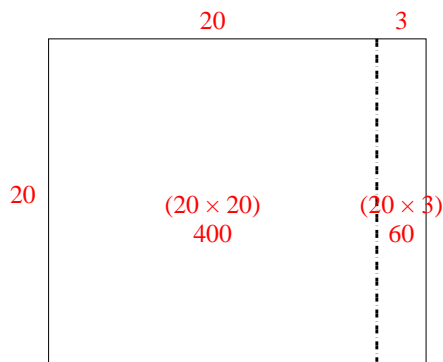


Use the array provided to solve each problem.

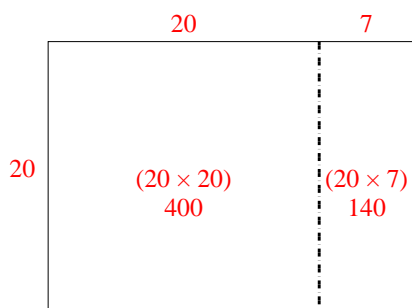
1)  $30 \times 31 =$



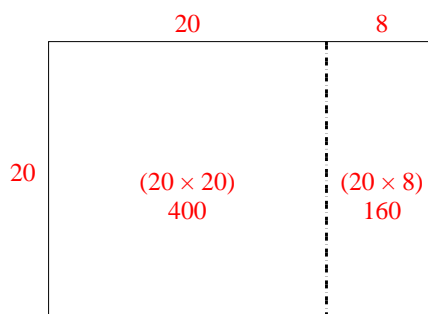
2)  $20 \times 23 =$



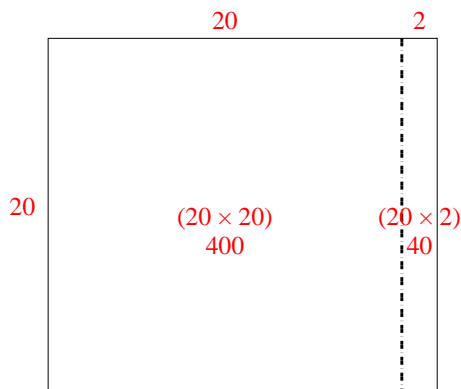
3)  $20 \times 27 =$



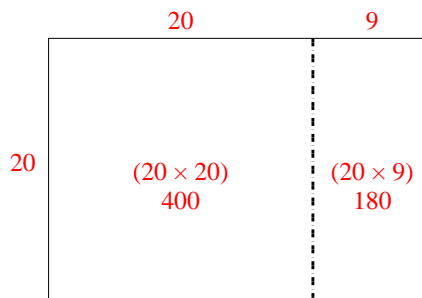
4)  $20 \times 28 =$



5)  $20 \times 22 =$



6)  $20 \times 29 =$



Answers

1. 930

2. 460

3. 540

4. 560

5. 440

6. 580